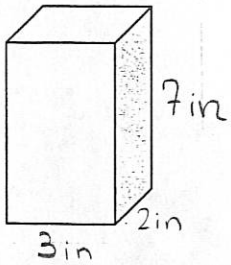
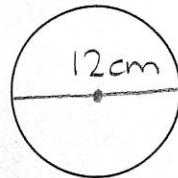


Using Math Formulas

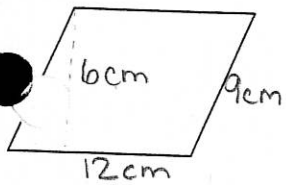
Find the Volume:



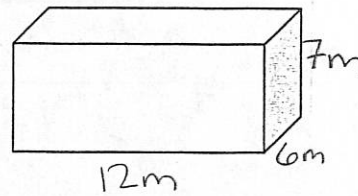
Find the Area:



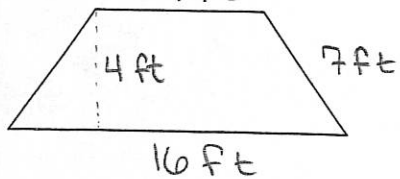
Find the Area:



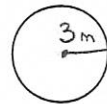
Find the Volume:



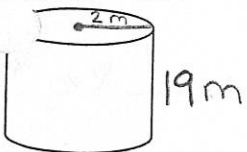
Find the Area:



Find the Circumference:



Find the Volume:



Find the Area:

