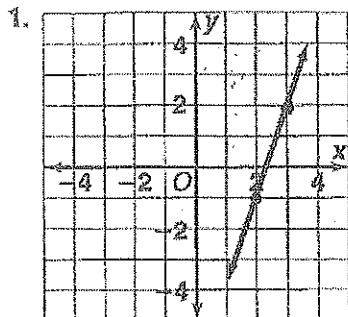


Skill: Finding Slope

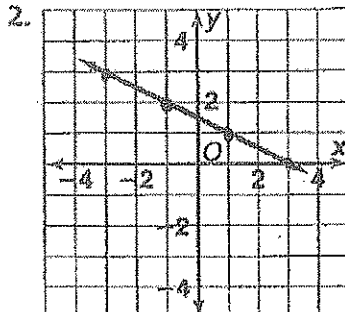
Investigation 4

Moving Straight Ahead

① Find the slope of each line. ② Find the y-intercept and write the equation for #2-5.



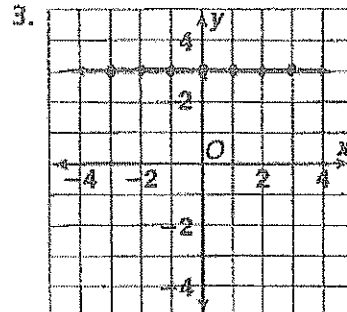
a) slope



a) slope:

b) y-intercept

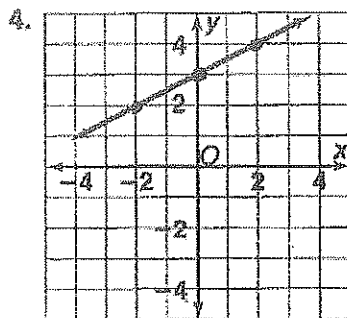
c) equation



a) slope

b) y-intercept

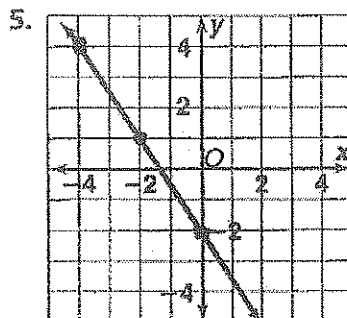
c) equation



a) slope:

b) y-intercept

c) equation



a) slope

b) y-intercept

c) equation