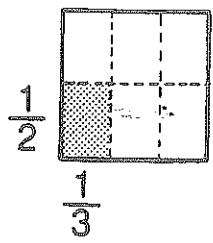


Basic Worksheet for 162-163

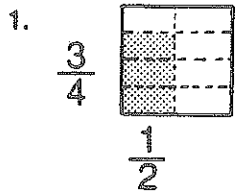


$$\frac{1}{2} \times \frac{1}{3} = \frac{1}{6}$$

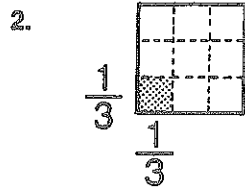


1/6 of the square has been shaded.

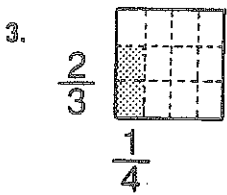
First study the picture.
Then give the product.



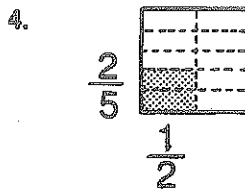
$$\frac{3}{4} \times \frac{1}{2} = \frac{3}{8}$$



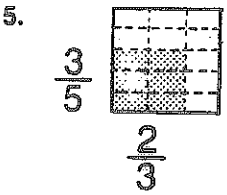
$$\frac{1}{3} \times \frac{1}{3} =$$



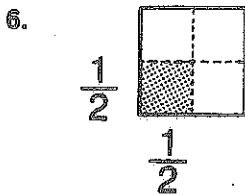
$$\frac{2}{3} \times \frac{1}{4} =$$



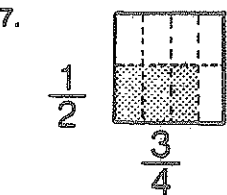
$$\frac{2}{5} \times \frac{1}{2} =$$



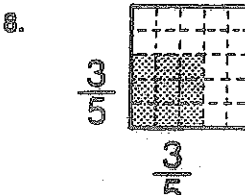
$$\frac{3}{5} \times \frac{2}{3} =$$



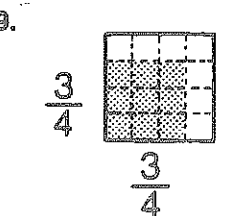
$$\frac{1}{2} \times \frac{1}{2} =$$



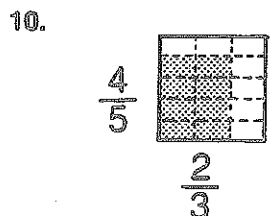
$$\frac{1}{2} \times \frac{3}{4} =$$



$$\frac{3}{5} \times \frac{3}{5} =$$



$$\frac{3}{4} \times \frac{3}{4} =$$



$$\frac{4}{5} \times \frac{2}{3} =$$